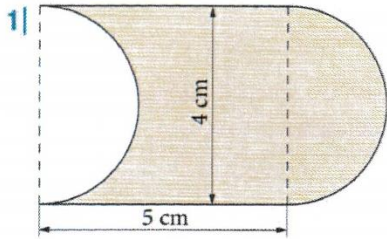


WICHTIG: Achte bitte auf die Verbesserung!

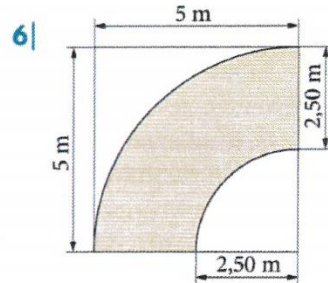
Zusammengesetzte Flächen



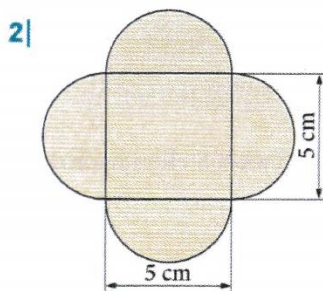
Berechnen Sie die Inhalte der gefärbten Flächen. Runden Sie gegebenenfalls auf zwei Stellen nach dem Komma.



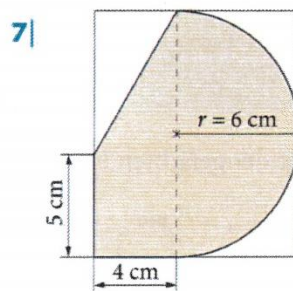
cm²



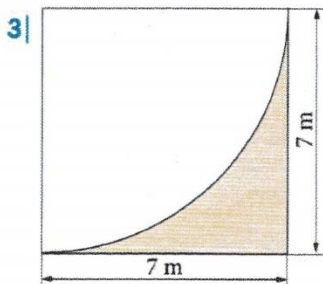
m²



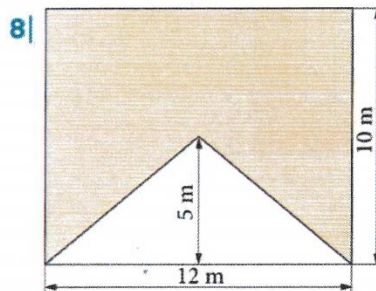
cm²



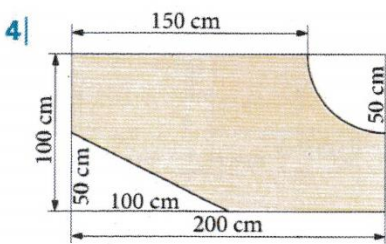
cm²



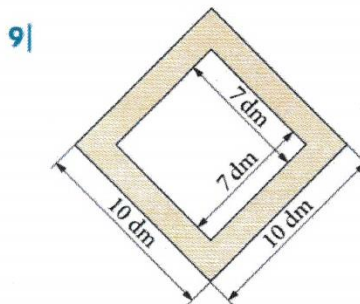
m²



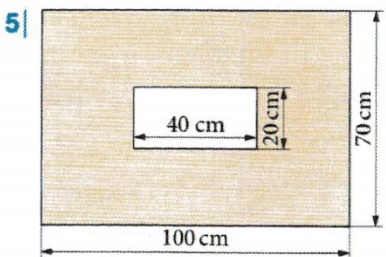
m²



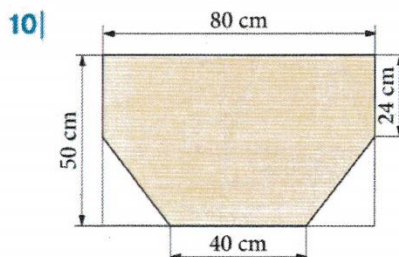
cm²



dm²



cm²



cm²

Lösungen

1-10| 10,54; 14,72; 20; 51; 64,25; 90; 90,52; 3 480; 6 200; 15 537,5