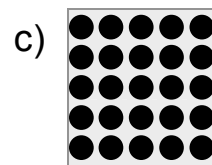

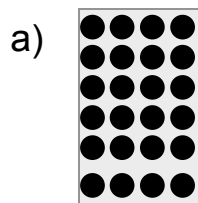




Zu Punktbildern Plus- und Malaufgaben finden


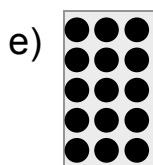

1 Schreibe unter jedes Punktbild die Plusaufgabe und die Malaufgabe. Rechne beide Aufgaben aus.



$$4 + 4 + 4 + 4 + 4 + 4 = 24$$

$6 \cdot 4 = 24$ $\square \cdot \square = \square$

$\square \cdot \square = \square$






$\square \cdot \square = \square$

$\square \cdot \square = \square$

$\square \cdot \square = \square$

2 Zeichne passende Punktbilder. Schreibe die Plusaufgabe auf. Löse beide Aufgaben.






$$3 + 3 + 3 + 3 = 12$$

$4 \cdot 3 = \square$

$5 \cdot 2 = \square$

$4 \cdot 5 = \square$



$2 \cdot 4 = \square$

$4 \cdot 6 = \square$

$3 \cdot 8 = \square$