



2.3.2

2.) Zeichne folgende Winkel!


$$\alpha = 36^\circ$$



$$\gamma = 19^\circ$$



$$\beta = 115^\circ$$




$$\delta = 90^\circ$$



$$\varepsilon = 172^\circ$$



$$\alpha = 65^\circ$$



$$\beta = 180^\circ$$

