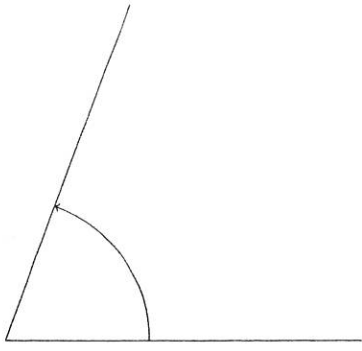


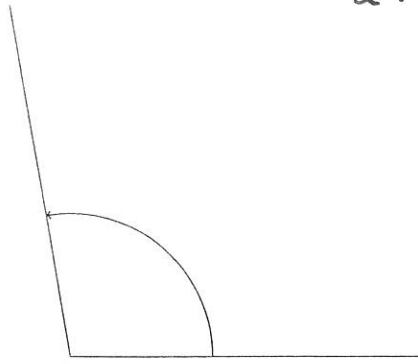
Bestimme mit dem Geodreieck die Größe der Winkel.

2.3.1

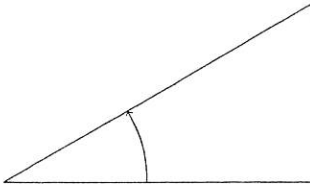
a)



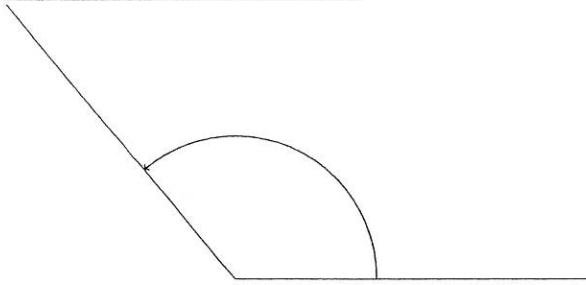
b)



c)



d)



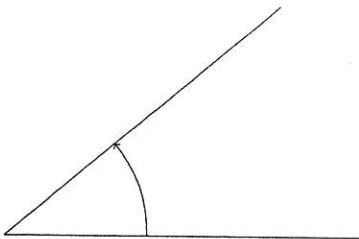
42°

70°

100°

30°

e)



130°

40°

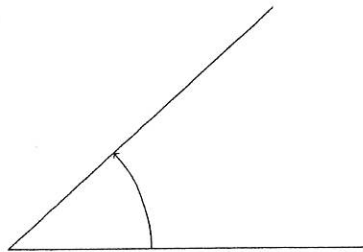
25°

20°

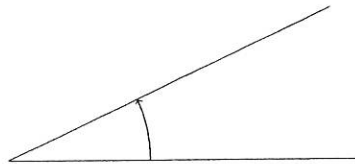
#### Aufgabe 4

Bestimme mit dem Geodreieck die Größe der Winkel.

a)




b)



35°

c)



d)

